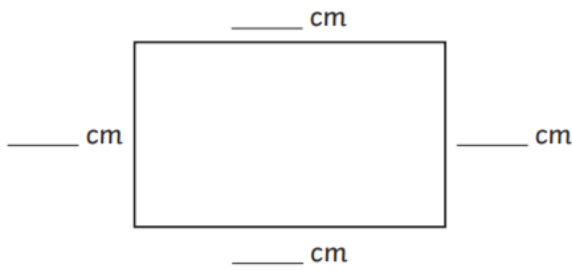


Calculate perimeter

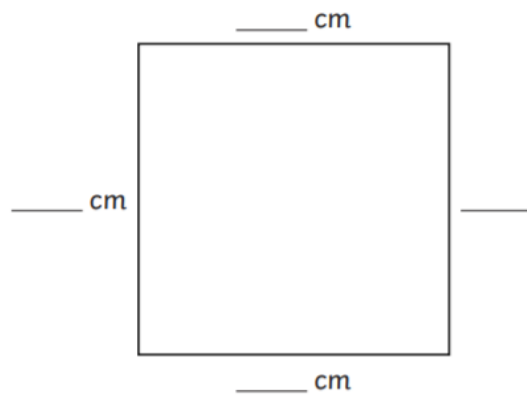
**Remember: perimeter is the distance around the outside of a shape**

Make sure you show your workings out in the space below

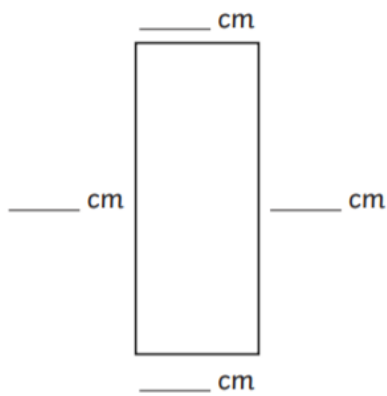
1) Measure and label the sides and calculate the perimeter of these shapes:



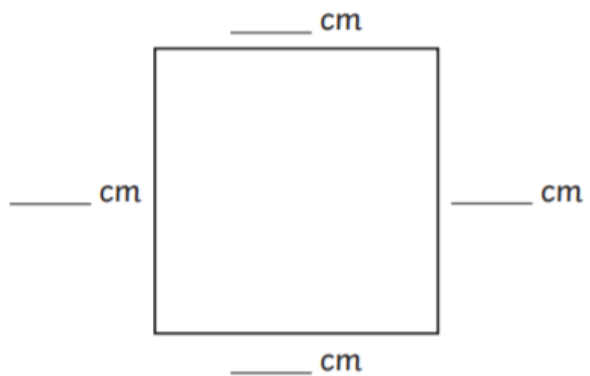
a) perimeter \_\_\_\_ cm



b) perimeter \_\_\_\_ cm



c) perimeter \_\_\_\_ cm



d) perimeter \_\_\_\_ cm

**Task two:**

- a) Using a ruler, draw your own squares and rectangles and write the length of each side outside the shape.
- b) Calculate the perimeter (make sure you show your workings out)