
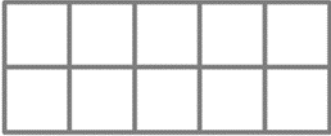
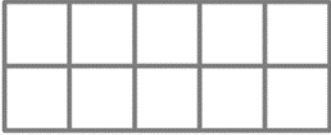




# Representing objects

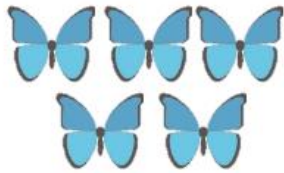
Challenge 1: Draw the number of objects. Then write the number and show it in a tens frame.

Objects	Number	10s frame
Draw six forks		
Draw eight teddies		
Draw two apples		
Draw one flower		
Draw ten footballs		


# Representing objects

Challenge 2:

4a. Which is the odd one out?



6




I know \_\_\_\_\_  
are the odd ones out.

I know \_\_\_\_\_  
are the odd ones out  
because \_\_\_\_\_

Explain your answer.

6a. Polly has 4 apples and 5 oranges.



Draw counters to represent the apples.  
Draw counters to represent the oranges.

Draw counters to represent the apples  
and the oranges.

Apples

Oranges

Apples and Oranges