

Ordering Angles

Aim: I can order angles.

Order these angles from smallest to largest. Write them in the right order in the boxes.

1. a)



b)



c)

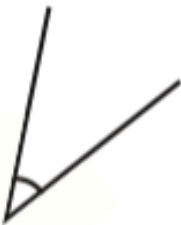


d)



--	--	--	--

2. a)



b)



c)



d)



--	--	--	--

3. a)



b)



c)



d)

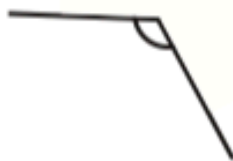


--	--	--	--

4. a)



b)



c)



d)



--	--	--	--

BLUE CLASS MATHS ACTIVITY - JULY 1ST, 2020

5. a)



b)



c)



d)



--	--	--	--

6. a)



b)



c)



d)



--	--	--	--

7. a)



b)



c)



d)



--	--	--	--

8. a)



b)



c)



d)



--	--	--	--

BLUE CLASS MATHS ACTIVITY – JULY 1ST, 2020

9. a)



b)



c)



d)



--	--	--	--

10. a)



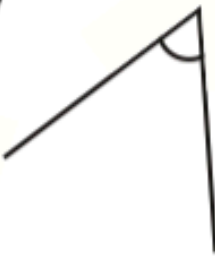
b)



c)



d)



--	--	--	--

ANSWER SHEET

Ordering Angles **Answers**

1.

d	b	a	c
---	---	---	---

2.

a	b	d	c
---	---	---	---

3.

d	c	b	a
---	---	---	---

4.

c	a	b	d
---	---	---	---

5.

d	c	b	a
---	---	---	---

6.

a	c	d	b
---	---	---	---

7.

b	a	d	c
---	---	---	---

8.

b	d	a	c
---	---	---	---

9.

b	a	d	c
---	---	---	---

10.

c	d	b	a
---	---	---	---