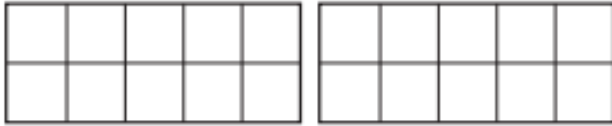


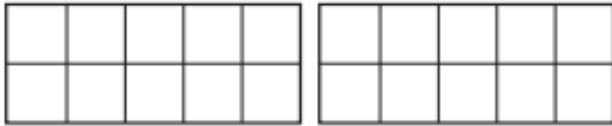
Maths: Comparing numbers and objects up to 50.

Activity 1: Work out the answers to the comparing objects problems.

1 a) Draw counters to show the apples.



b) Draw counters to show the children.



c) Complete the sentences.

There are apples.

There are children.

There are fewer _____ than _____

d)

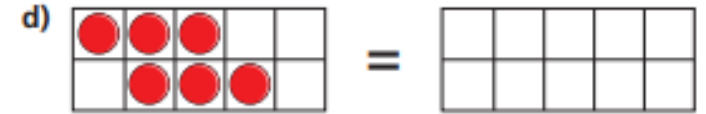
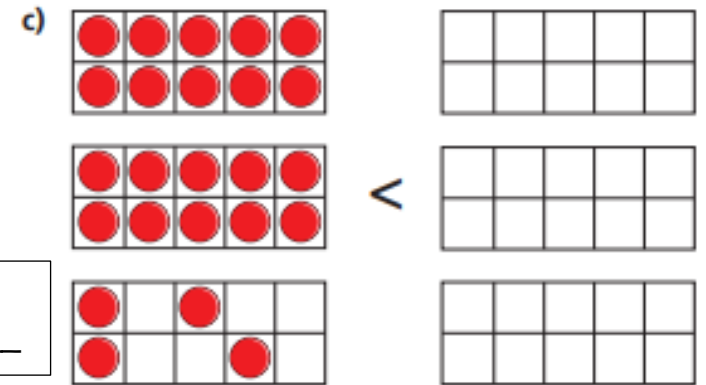
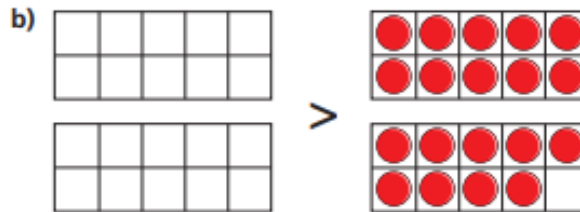
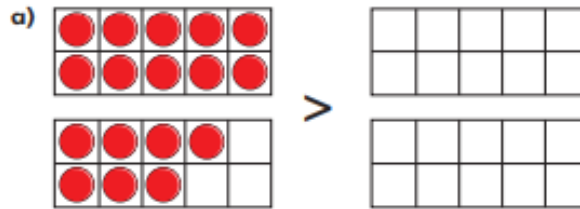


All the children can have one apple.

Is Teddy correct?

Teddy is _____ because _____

2 Draw counters to make the statements true.



Is there more than one answer for each?

Maths: Comparing numbers and objects up to 50.

Activity 2: Work out the answers to these comparing numbers problems.

1 Tick the number sentences that are true.


Use cubes or counters to help you.


- a) 12 is more than 13
- b) 33 is less than 41
- c) 2 tens and 8 ones is equal to twenty-eight
- d) $40 + 8$ is more than $30 + 9$
- e) Thirty-one is less than 3 tens

2 Write the missing phrase.

- a) 22 is _____ 29
- b) 41 is _____ 4 tens
- c) Forty-six is _____ $40 + 3$
- d) $40 + 8$ is _____ one more than 47

3 Write $<$, $>$ or $=$ in each circle.

24 ○ 

 ○ 3 tens and 14 ones

Use a dice to create your two-digit numbers in the first column and then think of a number to make the comparing sentence true.

4 Complete the table.

Write or draw your answers.

	is more than	
	=	
	>	
	is less than	
	is equal to	

