

Maths: One more and one less

If you need a recap of one more and one less, here is a link: <https://www.youtube.com/watch?v=Totj3oVgVy8> (the number goes above 50 but the concept is the same).

Activity 1: Circle the number given on the number track and colour the number one more in blue and colour the number one less in red.

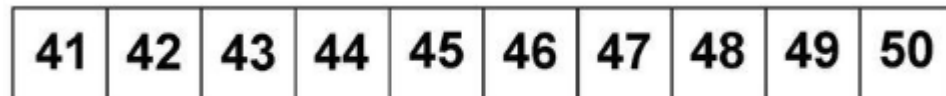
1. Circle the number 37 and find one more and one less.



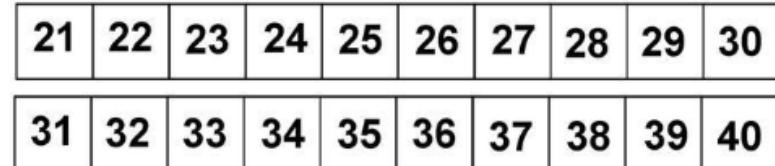
5. Circle the number 48 and find one more and one less.



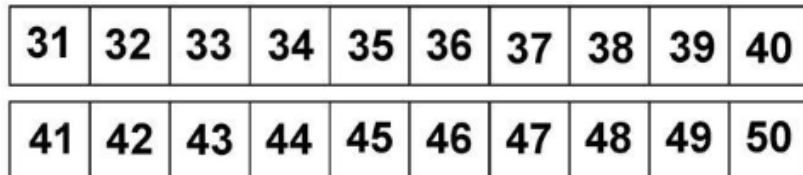
2. Circle the number 44 and find one more and one less.



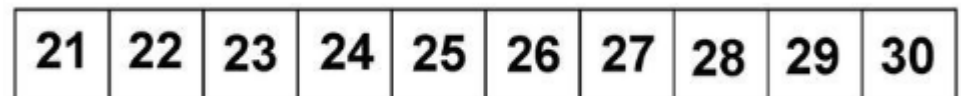
6. Circle the number 30 and find one more and one less.



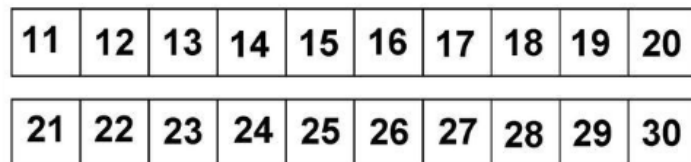
3. Circle the number 40 and find one more and one less.



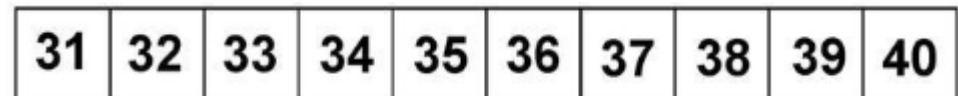
7. Circle the number 29 and find one more and one less.



4. Circle the number 21 and find one more and one less.



8. Circle the number 33 and find one more and one less.



Maths: One more and one less

Activity 2: Roll a dice twice to create a 2-digit number (use numbers below 50). Once created, work out what is one more and one less of the number. A link to an online dice if needed:

<https://www.random.org/dice/?num=2>

One less	Number created	One more

Activity 3: Choose the correct numbers to make these one more and one less sentences correct.

Choose the correct numbers to make the sentence correct.

30	28	50	36
46	44	48	34

___ is one less than 29.

35 is one less than ___.

___ is one more than 45.

49 is one more than ___.

Choose the correct numbers to make the sentence correct.

24	20	45	22
26	47	30	28

___ is one less than 25.

46 is one less than ___.

___ is one more than 21.

29 is one more than ___.

Maths: One more and one less

Answers:

Activity 1: Circle the number given on the number track and colour the number one more in blue and colour the number one less in red.

8. Circle the number 37 and find one more and one less.

- | | | | | | | | | | |
|----|----|----|----|----|---------------|-----------|----|----|----|
| 31 | 32 | 33 | 34 | 35 | 36 | 37 | 38 | 39 | 40 |
|----|----|----|----|----|---------------|-----------|----|----|----|

5. Circle the number 48 and find one more and one less.

- | | | | | | | | | | |
|----|----|----|----|----|----|---------------|-----------|----|----|
| 41 | 42 | 43 | 44 | 45 | 46 | 47 | 48 | 49 | 50 |
|----|----|----|----|----|----|---------------|-----------|----|----|

7. Circle the number 44 and find one more and one less.

- | | | | | | | | | | |
|----|----|---------------|-----------|----|----|----|----|----|----|
| 41 | 42 | 43 | 44 | 45 | 46 | 47 | 48 | 49 | 50 |
|----|----|---------------|-----------|----|----|----|----|----|----|

3. Circle the number 30 and find one more and one less.

- | | | | | | | | | | |
|-----------|----|----|----|----|----|----|----|---------------|-----------|
| 21 | 22 | 23 | 24 | 25 | 26 | 27 | 28 | 29 | 30 |
| 31 | 32 | 33 | 34 | 35 | 36 | 37 | 38 | 39 | 40 |

4. Circle the number 40 and find one more and one less.

- | | | | | | | | | | |
|-----------|----|----|----|----|----|----|----|---------------|-----------|
| 31 | 32 | 33 | 34 | 35 | 36 | 37 | 38 | 39 | 40 |
| 41 | 42 | 43 | 44 | 45 | 46 | 47 | 48 | 49 | 50 |

2. Circle the number 29 and find one more and one less.

- | | | | | | | | | | |
|----|----|----|----|----|----|----|---------------|-----------|----|
| 21 | 22 | 23 | 24 | 25 | 26 | 27 | 28 | 29 | 30 |
|----|----|----|----|----|----|----|---------------|-----------|----|

6. Circle the number 21 and find one more and one less.

- | | | | | | | | | | |
|-----------|----|----|----|----|----|----|----|----|---------------|
| 11 | 12 | 13 | 14 | 15 | 16 | 17 | 18 | 19 | 20 |
| 21 | 22 | 23 | 24 | 25 | 26 | 27 | 28 | 29 | 30 |

1. Circle the number 33 and find one more and one less.

- | | | | | | | | | | |
|----|---------------|-----------|----|----|----|----|----|----|----|
| 31 | 32 | 33 | 34 | 35 | 36 | 37 | 38 | 39 | 40 |
|----|---------------|-----------|----|----|----|----|----|----|----|

Activity 2: Roll a dice twice to create a 2-digit number (use numbers below 50). Once created, work out what is one more and one less of the number. A link to an online dice if needed: <https://www.random.org/dice/?num=2>

Endless due answers due

One less	Number created	One more

to numbers rolled.

Activity 3: Choose the correct numbers to make these one more and one less sentences correct.

Choose the correct numbers to make the sentence correct.

- | | | | |
|---------------|---------------|----|---------------|
| 30 | 28 | 50 | 26 |
| 46 | 44 | 48 | 34 |

28 is one less than 29.

35 is one less than **36**

46 is one more than 45.

49 is one more than **48**

Choose the correct numbers to make the sentence correct

- | | | | |
|---------------|---------------|----|---------------|
| 24 | 20 | 45 | 22 |
| 26 | 47 | 30 | 28 |

24 is one less than 25.

46 is one less than **47**

22 is one more than 21.

29 is one more than **28**

Maths: One more and one less