

Maths: Counting in 2s

If you need to practice or to recap this skill, here is a video to help you: <https://www.youtube.com/watch?v=GvTcpfSnOMQ>. This is a good website with lots of different activities to practice your counting in 2s: <http://www.snappymaths.com/multiplication/countin2s/countin2s.htm>.

Activity 1: On the number grid, add 2 each time and colour the number you land on.

1	2	3	4	5	6	7	8	9	10
11	12	13	14	15	16	17	18	19	20
21	22	23	24	25	26	27	28	29	30
31	32	33	34	35	36	37	38	39	40
41	42	43	44	45	46	47	48	49	50


Challenge: What pattern have you noticed from counting in 2's?

---


---

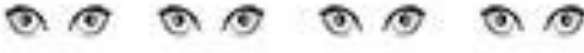
Maths: Counting in 2s


Activity 2: Count the objects in 2s. How many is there of each object?


 =

2     4   

 =

 =

 =

 =

Activity 3: Fill in the missing numbers by counting in 2s.

Hint: Check if the numbers are counting forwards or backwards before filling in the gaps.

a) 2    4    6    \_\_\_\_\_    10    \_\_\_\_\_

b) 24    22    \_\_\_\_\_    18    \_\_\_\_\_    14

c) \_\_\_\_\_    26    28    30    \_\_\_\_\_    34

d) 46    \_\_\_\_\_    \_\_\_\_\_    40    38    36

e) 28    \_\_\_\_\_    32    34    \_\_\_\_\_    38

f) \_\_\_\_\_    44    42    \_\_\_\_\_    38    36

g) 12    14    \_\_\_\_\_    18    \_\_\_\_\_    22

h) 20    \_\_\_\_\_    \_\_\_\_\_    14    12    10

Maths: Counting in 2s  
 If you need to practice or to recap this skill, here is a video to help you: <https://www.youtube.com/watch?v=GvTcpl5nOMQ>. This is a good website with lots of different activities to practice your counting in 2s: <http://www.snappymaths.com/multiplication/countin2s/countin2s.htm>.

Activity 1: On the number grid, add 2 each time and colour the number you land on.

1	2	3	4	5	6	7	8	9	10
11	12	13	14	15	16	17	18	19	20
21	22	23	24	25	26	27	28	29	30
31	32	33	34	35	36	37	38	39	40
41	42	43	44	45	46	47	48	49	50

Challenge: What pattern have you noticed from counting in 2's?

All the numbers end in a 0, 2, 4, 6 or 8 and are even.

Maths: Counting in 2s

Activity 2: Count the objects in 2s. How many is there of each object?



Activity 3: Fill in the missing numbers by counting in 2s.

Hint: Check if the numbers are counting forwards or backwards before filling in the gaps.

a) 2   4   6   8   10   12

b) 24   22   20   18   16   14

c) 24   26   28   30   32   34

d) 46   44   42   40   38   36

e) 28   30   32   34   36   38

f) 46   44   42   40   38   36

g) 12   14   16   18   20   22

h) 20   18   16   14   12   10